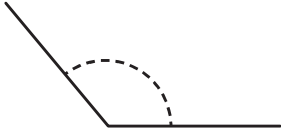


Winkelarten erkennen

Um welche Winkelart handelt es sich? Notiere.

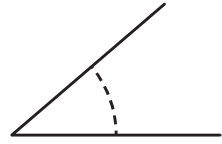
①



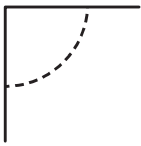
②



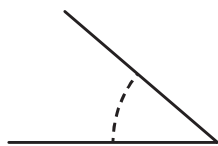
③



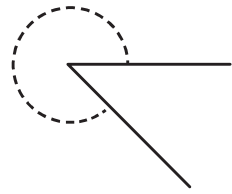
④



⑤



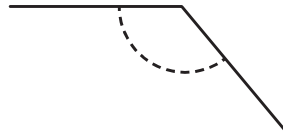
⑥



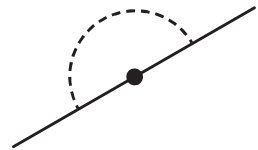
⑦



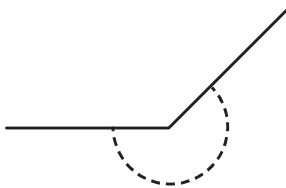
⑧



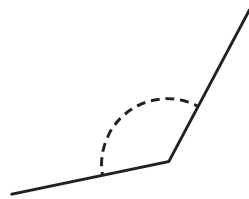
⑨



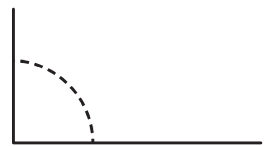
⑩



⑪



⑫



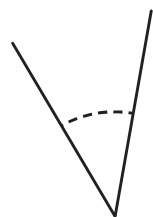
⑬



⑭




⑮



Winkel zeichnen

Zeichne folgende Winkel.

- ① 124° ② 45° ③ 180° ④ 360° ⑤ 270° ⑥ 90°
⑦ 135° ⑧ 66° ⑨ 315° ⑩ 163° ⑪ 251° ⑫ 104°



①

②

③

④

⑤

⑥

⑦

⑧

⑨

⑩

⑪

⑫